

Addition Word Problem Challenge Cards

Addition Word Problem Challenge Cards



Lauren had a collection of 26 stamps out of 60. Her friend gives her another 19.

How many stamps does she have now?

How many more stamps does she need to finish her collection?



Addition Word Problem Challenge Cards



Hannah wants to make 100 cookies for the school cake sale on Wednesday. She baked 44 cookies on Monday and 39 cookies on Tuesday.

How many cookies did she bake altogether?

How many more does she need to bake on Wednesday?




Addition Word Problem Challenge Cards



Sophie and Ted are collecting football stickers. Ted had 25 football stickers. Sophie has 36.

How many do they have in total?

How many more stickers does Sophie have than Ted?




Addition Word Problem Challenge Cards



Jafar was playing marbles. He started with 26 marbles. His friend gave him 12 more.

How many does he now have?

Jafar wants to play a game that needs 50 marbles, how many more does he need?




Addition Word Problem Challenge Cards



Rashid is making party bags and needs 80 sweets in total. He already has 57 sweets and mum buys a bag of 14 sweets.

How many sweets does he have now?

How many more sweets does he need to finish his party bags?



Addition Word Problem Challenge Cards



Megan is collecting special coins, she has 26 coins out of 82 to complete her set. She orders another 26 from the post office.

How many coins does she have now?

How many more coins does she need to finish her collection?



Addition Word Problem Challenge Cards



Jasmine is helping her mum craft 30 beaded necklaces to sell on her mum's market stall. She crafts 8 on the first day, 6 on the second day and 6 on the third day.

How many beaded necklaces did Jasmine craft altogether?

How many beaded necklaces did mum craft?

Addition Word Problem Challenge Cards



Jon and Lola want to do 40 kick-ups between them. Jon has done 14 kick-ups and Lola has done two more.

How many kick-ups have they done in total?

How many more kick-ups do they need to do?



Addition Word Problem Challenge Cards



Aamina is playing a game. The finish is on space number 28. She starts on 0 and on her first three turns she rolls a double 3, a 2 and a 9.

How many spaces did she move?

How many more spaces will she need to pass to get to the finish?



Addition Word Problem Challenge Cards



Ruth has a huge cattery and can look after 45 cats in total. On Monday she has 37 cats and 7 more cats are checked in on Tuesday.

How many cats does she have in her cattery altogether?

How many spaces does she have left?



Lauren had a collection of 26 stamps out of 60. Her friend gives her another 19.

How many stamps does she have now? **45**

How many more stamps does she need to finish her collection? **15**

Hannah wants to make 100 cookies for the school cake sale on Wednesday. She baked 44 cookies on Monday and 39 cookies on Tuesday.

How many cakes did she bake altogether? **83**

How many more does she need to bake on Wednesday? **17**

Sophie and Ted are collecting football stickers. Ted had 25 football stickers. Sophie has 36.

How many do they have in total? **61**

How many more stickers does Sophie have than Ted? **11**

Jafar was playing marbles. He started with 26 marbles. His friend gave him 12 more.

How many does he now have? **38**

Jafar wants to play a game that needs 50 marbles, how many more does he need? **12**

Rashid is making party bags and needs 80 sweets in total. He already has 57 sweets and mum buys a bag of 14 sweets.

How many sweets does he have now? **71**

How many more sweets does he need to finish his party bags? **9**

Megan is collecting special coins, she has 26 coins out of 82 to complete her set. She orders another 26 from the post office.

How many coins does she have now? **52**

How many more coins does she need to finish her collection? **28**

Jasmine is helping her mum craft 30 beaded necklaces to sell on her mum's market stall. She crafts 8 on the first day, 6 on the second day and 6 on the third day.

How many beaded necklaces did Jasmine craft altogether? **20**

How many beaded necklaces did mum craft? **10**

Jon and Lola want to do 40 kick-ups between them. Jon has done 14 kick-ups and Lola has done two more.

How many kick-ups have they done in total? **30**

How many more kick-ups do they need to do? **10**

Aamina is playing a game. The finish is on space number 28. She starts on 0 and on her first three turns she rolls a double 3, a 2 and a 9.

How many spaces did she move? **17**

How many more spaces will she need to pass to get to the finish? **11**

Ruth has a huge cattery and can look after 45 cats in total. On Monday she has 37 cats and 7 more cats are checked in on Tuesday.

How many cats does she have in her cattery altogether? **44**

How many spaces does she have left? **1**